
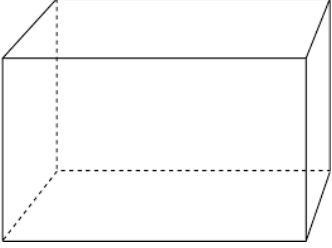
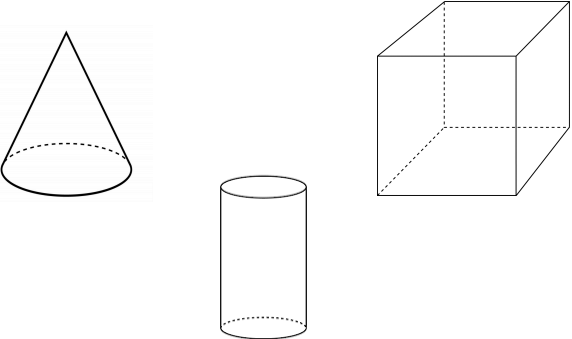
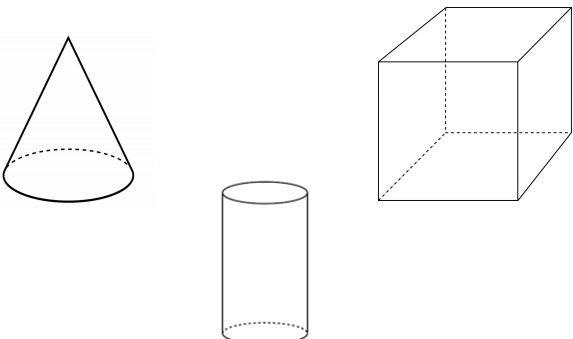
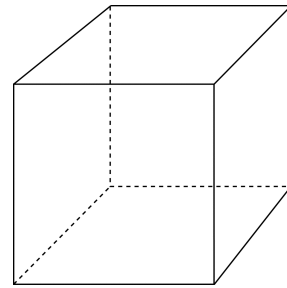
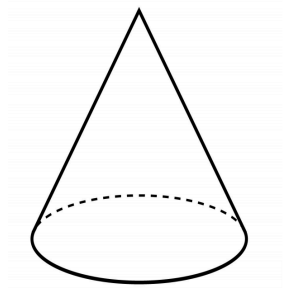


| | |
|---|---|
| <p>1) Circle the name of the shape below:</p>  <p>Cone Cylinder</p> | <p>2) Circle the name of the shape below:</p>  <p>Cube Rectangular Prism</p> |
| <p>3) Circle the shape with 1 face and 1 vertex.</p>  | <p>4) Circle the shape with 6 faces and 8 vertices.</p>  |
| <p>5) Finish the sentence: A solid shape that is not flat is a _____.</p> <p>A) three-dimensional shape B) two-dimensional shape</p> | <p>6) Finish the sentence: A three-dimensional shape with 6 faces is _____.</p> <p>A) sphere B) rectangular prism</p> |

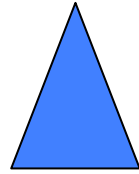


7)

Circle the cone:



8)

What is the shape of the faces of this object?



9)

Shade in all the 3-dimensional shapes below:

