
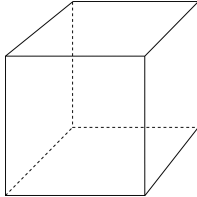

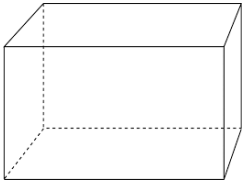
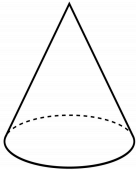
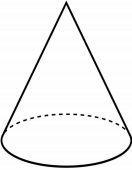
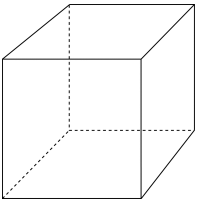

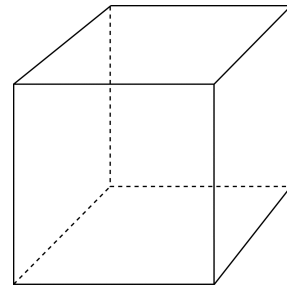
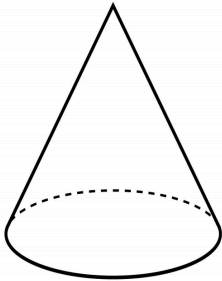


<p>1) Circle the name of the shape below:</p>  <p>Cone Cylinder</p>	<p>2) Circle the name of the shape below:</p>  <p>Cube Square</p>
<p>3) Circle the shape with 6 faces and 8 vertices.</p>   	<p>4) Circle the shape with 1 face and 1 vertex.</p>   
<p>5) Finish the sentence: A solid shape that is not flat is a _____.</p> <p>A) three-dimensional shape B) six-dimensional shape</p>	<p>6) Finish the sentence: A three-dimensional shape with 0 faces is a _____.</p> <p>A) sphere B) cube</p>

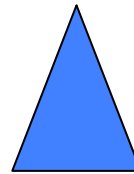


7)

Circle the cone:



8)

What is the shape of the faces of this object?



9)

Shade in all the 2-dimensional shapes below:

