

1)

What is the related subtraction fact?

$$5 + 6 = 11$$

A) $6 - 5 = 1$

B) $10 - 5 = 5$

C) $11 - 6 = 5$

D) $11 - 4 = 7$

2)

Add the doubles fact, then subtract:

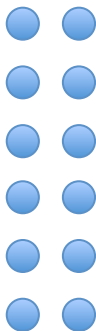
$$5 + 5 = \underline{\quad}$$

$$10 - 5 = \underline{\quad}$$

3)


Subtract:

12

$$\begin{array}{r} 12 \\ -4 \\ \hline \end{array}$$


4)

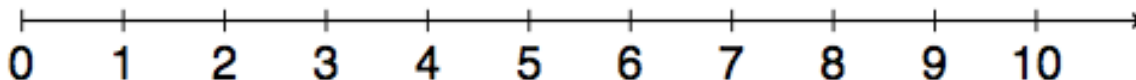
There are 6 birds in the tree. 2 fly away. How many birds are left?



___ birds

5)

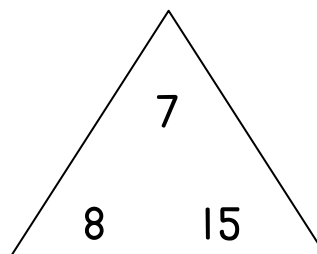
Use the number line to subtract. What is the difference?



$$10 - 4 = \underline{\quad}$$

6)

Complete the fact family:



$7 + 8 = \underline{\quad}$

$8 + 7 = \underline{\quad}$

$15 - 8 = \underline{\quad}$

$15 - 7 = \underline{\quad}$

7)

Find the missing addend:

Part	Part
6	
Whole	
13	

A) 6

B) 7

C) 8

D) 9

8)


Find the difference:

$$\begin{array}{r} 15 \\ - 6 \\ \hline \end{array}$$

9)

Write the subtraction number sentence for the story:

Jared sees 16 fish in the pond. 9 fish swim away. How many fish are left?



$$\underline{\quad} - \underline{\quad} = 7 \text{ fish}$$