

1)

What is the related subtraction fact?

$$6 + 5 = 11$$

A) $6 - 5 = 1$ B) $11 - 5 = 6$

C) $10 - 5 = 5$ D) $11 - 7 = 4$

2)

Add the doubles fact, then subtract:

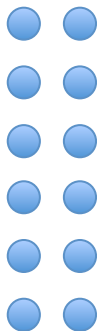
$$7 + 7 = \underline{\quad}$$

$$14 - 7 = \underline{\quad}$$

3)


Subtract:

$$\begin{array}{r} 12 \\ - 6 \\ \hline \end{array}$$



4)

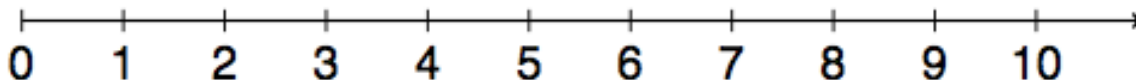
There are 6 birds in the tree. 4 fly away. How many birds are left?



___ birds

5)

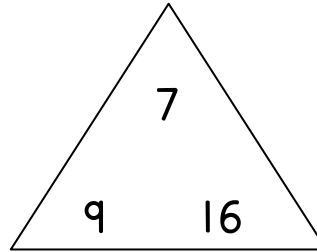
Use the number line to subtract. What is the difference?



$$10 - 6 = \underline{\quad}$$

6)

Complete the fact family:



$$7 + 9 = \underline{\quad}$$

$$16 - 9 = \underline{\quad}$$

$$9 + 7 = \underline{\quad}$$

$$16 - 7 = \underline{\quad}$$

7)

Find the missing addend:

Part	Part
6	
Whole	
13	

A) 9

B) 8

C) 7

D) 6

8)


Find the difference:

$$\begin{array}{r} 14 \\ - 5 \\ \hline \end{array}$$

9)

Write the subtraction number sentence for the story:

Jared sees 17 fish in the pond. 9 fish swim away. How many fish are left?



$$\underline{\quad} - \underline{\quad} = 8 \text{ fish}$$