

1)

What is the number?

Tens	Ones
5	7

 fifty-seven

2)

Fill in the blank when counting by 5's:

5, 10, ____, 20, 25, 30

3)

Fill in the blank with the missing number:

31, 32, 33, ____, 35, 36

4)

Fill in the blank when counting by 10's:

10, ____, 30, 40, 50

5)

Compare the two numbers.
Choose <, = or >.

Tens	Ones
1	8
4	2

18 ○ 42






6)

56 ones =

____ tens and ____ ones

7)

Count the groups of ten. Write the number.



_____ tens = _____

8)




Aidan has 32 lego men. How many tens and how many ones does he have?



_____ tens _____ ones

9)

How many tens and how many more are there?
What is the number?



A) 2 tens and 6 more is 62

B) 2 tens and 6 more is 26

C) 6 tens and 2 more is 80