

1)

Add:

$$1 + 3 = \underline{\quad}$$

2)

Add:

$$\begin{array}{r} 5 \\ +4 \\ \hline \end{array}$$

3)

Which addition number sentence matches the picture?



A)  $3 + 2 = 5$

B)  $1 + 3 = 4$

C)  $4 + 3 = 7$

D)  $7 + 2 = 9$

4)

Subtract:

$$8 - 6 = \underline{\quad}$$


5)

Subtract:

$$\begin{array}{r} 7 \\ -2 \\ \hline \end{array}$$

6)

Write the addition number sentence and sum.



$$\underline{\quad} + \underline{\quad} = \underline{\quad}$$

7)

Zak was playing soccer. He kicked 5 balls and 3 went into the goal. How many balls missed the goal?



A) 5 balls

B) 4 balls

C) 3 balls

D) 2 balls

8)

On Monday there were 3 students absent in Mrs. Johnson's class. On Tuesday there were 4 students absent and on Wednesday 7 students were absent. How many students were absent in all?



\_\_\_\_\_ students

9)


Add:

$$\begin{array}{r} 6 \\ + 8 \\ \hline \end{array}$$

10)

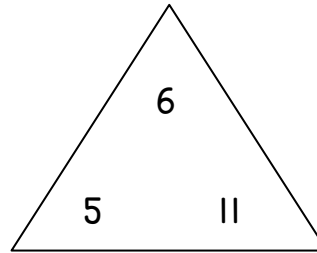
Subtract:

$$\begin{array}{r} 15 \\ - 6 \\ \hline \end{array}$$



11)

Complete the fact family:



$6 + 5 = \underline{\quad}$


$11 - 5 = \underline{\quad}$

$5 + 6 = \underline{\quad}$

$11 - 6 = \underline{\quad}$

12)

Write the subtraction number sentence for the story:  
 Jared sees 15 fish in the pond. 8 fish swim away. How many fish are left?



$\underline{\quad} - \underline{\quad} = \underline{\quad} \text{ fish}$

13)

Fill in the blank when counting by 5's:

5, 10, 15, \_\_\_\_\_, 25, 30

14)

Compare the two numbers:

Choose  $>$ ,  $=$  or  $<$ .

42 ○ 29

15)

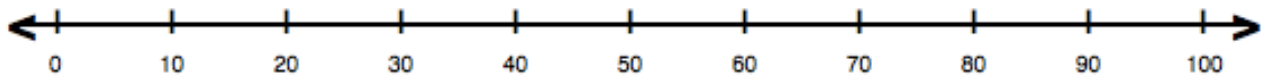
Aidan has 72 lego men. How many tens and how many ones does he have?



\_\_\_\_\_ tens \_\_\_\_\_ ones

16)

Use the number line to add. Circle the number that you land on. What is the sum?



$$50 + 30 = \underline{\hspace{2cm}}$$

17)

Write the addition number sentence for the story:

Mrs. Deller has 20 teddy bears at her house. Mrs. Stith has 30 teddy bears at her house. How many teddy bears are there total?



$$\underline{\hspace{2cm}} + \underline{\hspace{2cm}} = \underline{\hspace{2cm}}$$

18)

Write the subtraction number sentence for the story:

Mrs. Johnson has 80 frogs. She gives 40 of her frogs to Mrs. Scott. How many frogs does Mrs. Johnson have left?



$$\underline{\hspace{2cm}} - \underline{\hspace{2cm}} = \underline{\hspace{2cm}}$$


19)

Fill in the digital clock with half past 3:



20)

Draw a line to split the shape into 2 equal parts.



Use the given survey for questions 21 to 23:

Favorite Shapes		
Shapes	Tally	Total
Circle		4
Square		7
Triangle		5

21)

How many students voted for circles?

\_\_\_ circles

22)

How many more students voted for squares than triangles?

- A) 1                      B) 2  
C) 3                      D) 4


23)

Use the tally chart above to make a picture graph:

Favorite Shapes								
Circle								
Square								
Triangle								

24)

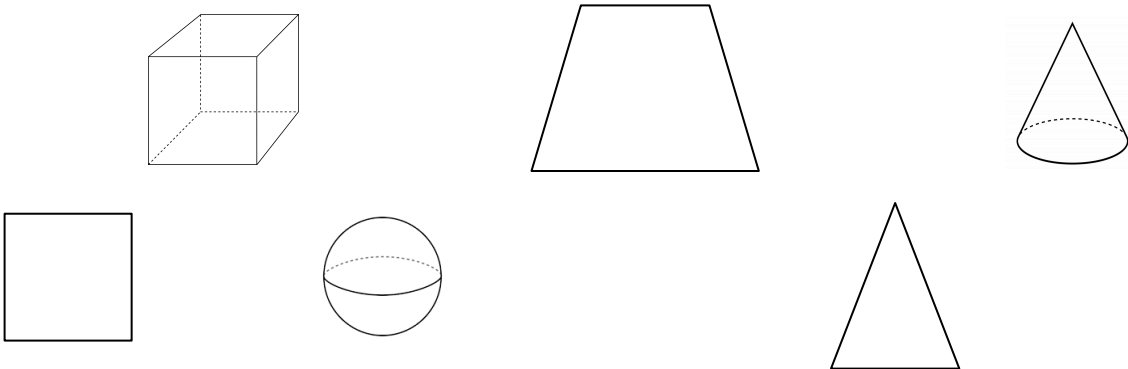
Please circle:  
Is the leaf longer than or shorter than the ladybug?



longer or shorter

25)

Shade in all the 3-dimensional shapes below:



26)

Jennifer made a new shape out of squares.  
Circle the name of the shape she created?



Trapezoid

Rectangle

**1st Grade Fall Assessment**  
Molalla River School District

Name \_\_\_\_\_



**1st Grade Fall Assessment**  
Molalla River School District

Name \_\_\_\_\_

**1st Grade Fall Assessment**  
Molalla River School District

Name \_\_\_\_\_

**1st Grade Fall Assessment**  
Molalla River School District

Name \_\_\_\_\_

**1st Grade Fall Assessment**  
Molalla River School District

Name \_\_\_\_\_

**1st Grade Fall Assessment**  
Molalla River School District

Name \_\_\_\_\_

**1st Grade Fall Assessment**  
Molalla River School District

Name \_\_\_\_\_