

1)

Add:

$$3 + 2 = \underline{\quad}$$

2)

Add:

$$\begin{array}{r} 3 \\ + 5 \\ \hline \end{array}$$

3)

Which addition number sentence matches the picture?



A) $3 + 3 = 6$

B) $1 + 6 = 7$

C) $6 + 2 = 8$

D) $5 + 4 = 9$

4)

Subtract:

$$7 - 4 = \underline{\quad}$$


5)

Subtract:

$$\begin{array}{r} 9 \\ - 6 \\ \hline \end{array}$$

6)

Write the addition number sentence and sum.



$$\underline{\quad} + \underline{\quad} = \underline{\quad}$$

7)

Zak was playing soccer. He kicked 6 balls and 2 went into the goal. How many balls missed the goal?



A) 5 balls

B) 4 balls

C) 3 balls

D) 2 balls

8)

On Monday there were 3 students absent in Mrs. Johnson's class. On Tuesday there were 6 students absent and on Wednesday 5 students were absent. How many students were absent in all?



_____ students

9)


Add:

$$\begin{array}{r} 5 \\ + 9 \\ \hline \end{array}$$

10)

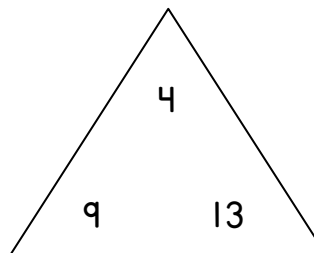
Subtract:

$$\begin{array}{r} 15 \\ - 9 \\ \hline \end{array}$$



11)

Complete the fact family:



$4 + 9 = \underline{\quad}$


$13 - 9 = \underline{\quad}$

$9 + 4 = \underline{\quad}$

$13 - 4 = \underline{\quad}$

12)

Write the subtraction number sentence for the story:
Timmy sees 13 fish in the pond. 7 fish swim away. How many fish are left?



$\underline{\quad} - \underline{\quad} = \underline{\quad} \text{ fish}$

13)

Fill in the blank when
counting by 5's:

5, 10, 15, _____, 25, 30

14)

Compare the two
numbers:

Choose $>$, $=$ or $<$.

28 ○ 61

15)

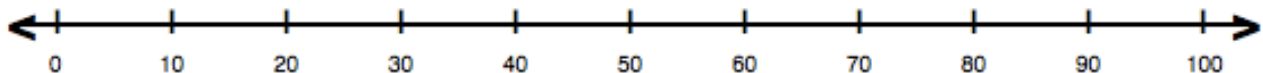
Aidan has 59 lego men. How many tens and
how many ones does he have?



_____ tens _____ ones

16)

Use the number line to add. Circle the number
that you land on. What is the sum?



$$40 + 20 = \underline{\hspace{2cm}}$$

17)

Write the addition number sentence for the story:

Mrs. Deller has 10 teddy bears at her house. Mrs. Stith has 50 teddy bears at her house. How many teddy bears are there total?



$$\underline{\hspace{2cm}} + \underline{\hspace{2cm}} = \underline{\hspace{2cm}}$$

18)

Write the subtraction number sentence for the story:


Mrs. Johnson has 70 frogs. She gives 50 of her frogs to Mrs. Scott. How many frogs does Mrs. Johnson have left?



$$\underline{\hspace{2cm}} - \underline{\hspace{2cm}} = \underline{\hspace{2cm}}$$


19)

Fill in the digital clock with half past 6:



20)

Draw a line to split the shape into 2 equal parts.



Use the given survey for questions 21 to 23:

Favorite Shapes		
Shapes	Tally	Total
Circle		4
Square		7
Triangle		5

21)

How many students voted for squares?

_____ squares

22)

How many more students voted for triangles than circles?

- A) 1 B) 2
C) 3 D) 4

23)

Use the tally chart above to make a picture graph:

Favorite Shapes									
Circle									
Square									
Triangle									

24)

Please circle:

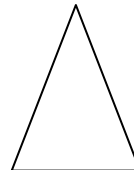
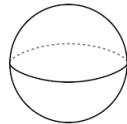

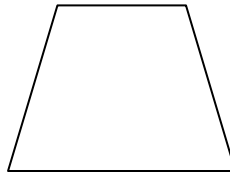
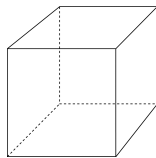
Is the pencil longer than or shorter than the ruler?



longer or shorter

25)


Shade in all the 2-dimensional shapes below:



26)

Jill made a new shape out of squares.

Circle the name of the shape she created?



Rectangle

Trapezoid

1st Grade Spring Assessment
Molalla River School District

Name _____

1st Grade Spring Assessment
Molalla River School District

Name _____

1st Grade Spring Assessment

Molalla River School District

Name _____

1st Grade Spring Assessment
Molalla River School District

Name _____

1st Grade Spring Assessment

Molalla River School District

Name _____

1st Grade Spring Assessment
Molalla River School District

Name _____

1st Grade Spring Assessment
Molalla River School District

Name _____